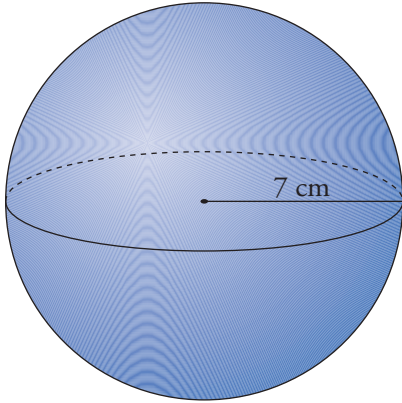




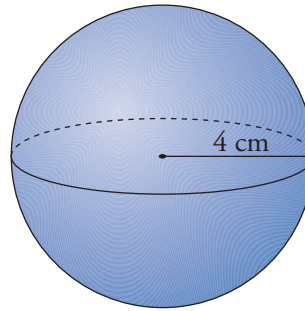
1 Calcula el área total de cada uno de los siguientes cuerpos (utiliza $\pi = 3,14$ y, si es necesario, redondea a las centésimas):

a)



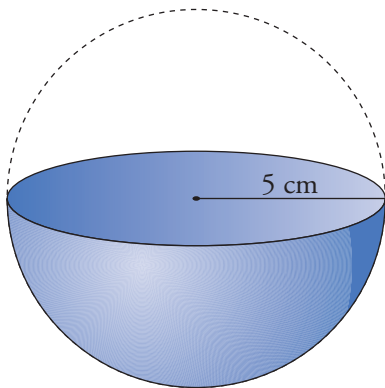
$A = \square \text{ cm}^2$

b)



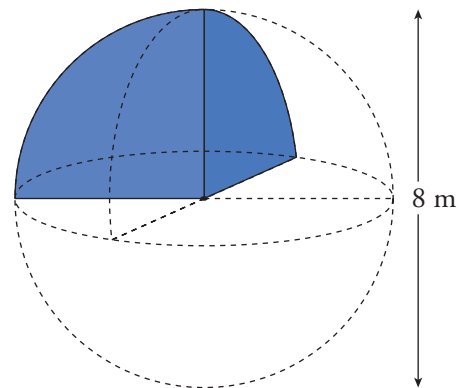
$A = \square \text{ cm}^2$

c)



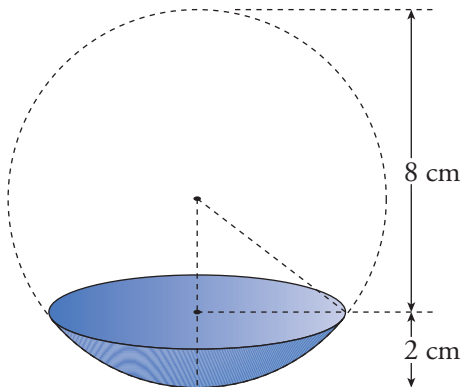
$A = \square \text{ cm}^2$

d)



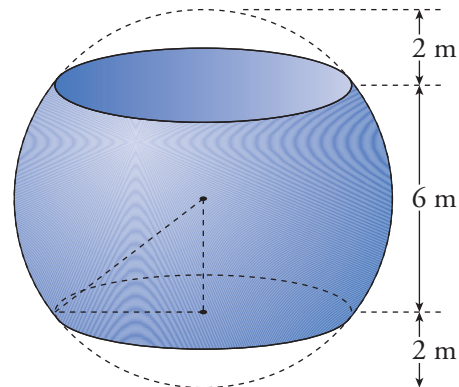
$A = \square \text{ m}^2$

e)



$A = \square \text{ cm}^2$

f)



$A = \square \text{ m}^2$